











①









--	--	--	--	--	--	--	--	--	--	--	--	--



②



--	--	--	--	--	--	--	--	--	--	--	--	--



①、②について動物が○のところまで進みました。3回目のサイコロの目はいくつでしょう。
下から選んで○をつけましょう。

