

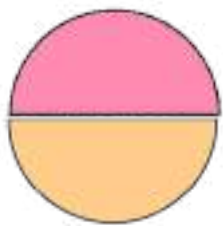

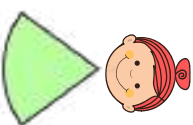





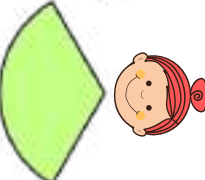


1つのケーキを2人でわけると



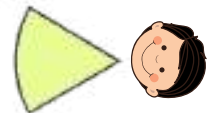


1つのケーキを5人でわけると







1つのケーキを3人でわけると



1つのケーキを6人でわけると



1つのケーキを4人でわけると



1つのケーキを8人でわけると

